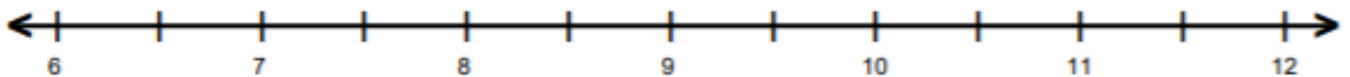


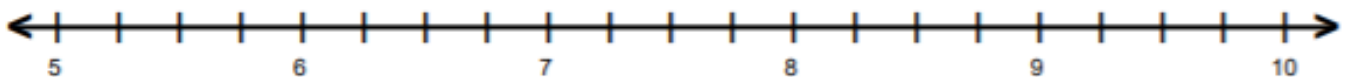
Copy the number lines onto a piece of paper. (use a ruler)

Place the decimals on the number line using the letter.

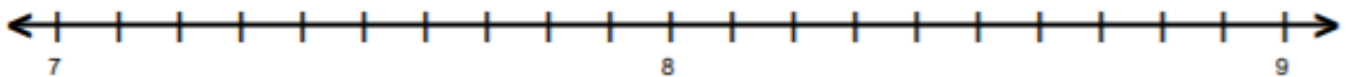
Decimal Numbers on Number Lines



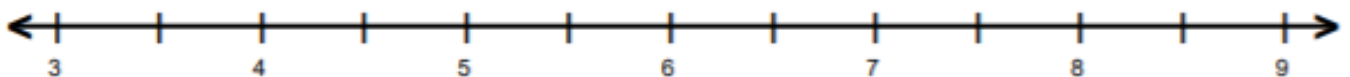
A = 7.5 B = 10.5 C = 9.5 D = 8.5



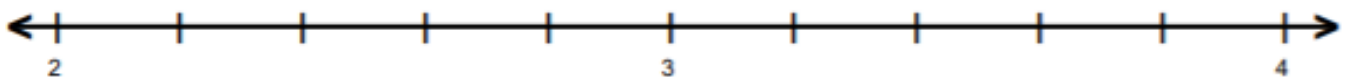
A = 5.5 B = 7.25 C = 6.25 D = 8.75



A = 8.3 B = 8.4 C = 7.1 D = 7.9



A = 5.5 B = 4.5 C = 3.5 D = 7.5



A = 2.4 B = 3.6 C = 2.2 D = 3.8